

1. Consider a ray of light traveling in vacuum from point P_1 to P_2 by way of the point Q on a plane mirror as shown in Fig. 1. Show that Fermat's principle implies that, on the actual path followed, Q lies in the same vertical plane as P_1 and P_2 and obeys the law of reflection, that is $\theta_1 = \theta_2$. [Hints: Let the mirror lie in the x - z plane, and let P_1 lie on the y axis at $(0, y_1, 0)$ and P_2 in the x - y plane at $(x_2, y_2, 0)$. Finally, let $Q = (x, 0, z)$. Calculate the time for the light to traverse the path P_1QP_2 and show that it is minimum when Q has $z = 0$ and satisfies the law of reflection.]

2. Nowadays dispersing prisms come in a great variety of sizes and shapes. Typically, a ray entering a dispersing prism will emerge having been deflected from its original direction by an angle δ , known as the angular deviation. Show that the minimum angle of deviation, δ_{\min} , for a prism (with apex angle Φ and index of refraction n) occurs when the angle of incidence θ_1 is such that the refracted ray inside the prism makes the same angle with the normal to the two prism faces, as shown in Fig. 2.

3 An interesting effect called total internal reflection can occur when light is directed from a medium having a given index of refraction toward one having a lower index of refraction. Consider a light beam traveling in medium 1 and meeting the boundary between medium 1 and medium 2, where n_1 is greater than n_2 . Various possible directions of the beam are indicated by rays 1 through 5 in Fig. 3. The refracted rays are bent away from the normal because n_1 is greater than n_2 . At some particular angle of incidence θ_c , called the critical angle, the refracted light ray moves parallel to the boundary so that $\theta_2 = \pi/2$. For angles of incidence greater than θ_c the beam is entirely reflected at the boundary. Consider a triangular glass prism with apex angle Φ and index of refraction n . What is the smallest angle of incidence θ_1 for which a light ray can emerge from the other side?

4 The index of refraction for violet light in silica flint glass is 1.66, and that for red light is 1.62; see Fig. 4. What is the angular dispersion of visible light passing through a prism of apex angle 60.0° if the angle of incidence is 50.0° ?

5. A spherical mirror has a focal length of 10.0 cm. (i) Locate and describe the image for an object distance of 25.0 cm. (ii) Locate and describe the image for an object distance of 10.0 cm. (iii) Locate and describe the image for an object distance of 5.00 cm.

6. An automobile rearview mirror shows an image of a truck located 10.0 m from the mirror. The focal length of the mirror is -0.60 m. (i) Find the position of the image of the truck. (ii) Find the magnification of the image.

7. A small fish is swimming at a depth d below the surface of a pond. (i) What is the apparent depth of the fish as viewed from directly overhead? (ii) If your face is a distance d above the water

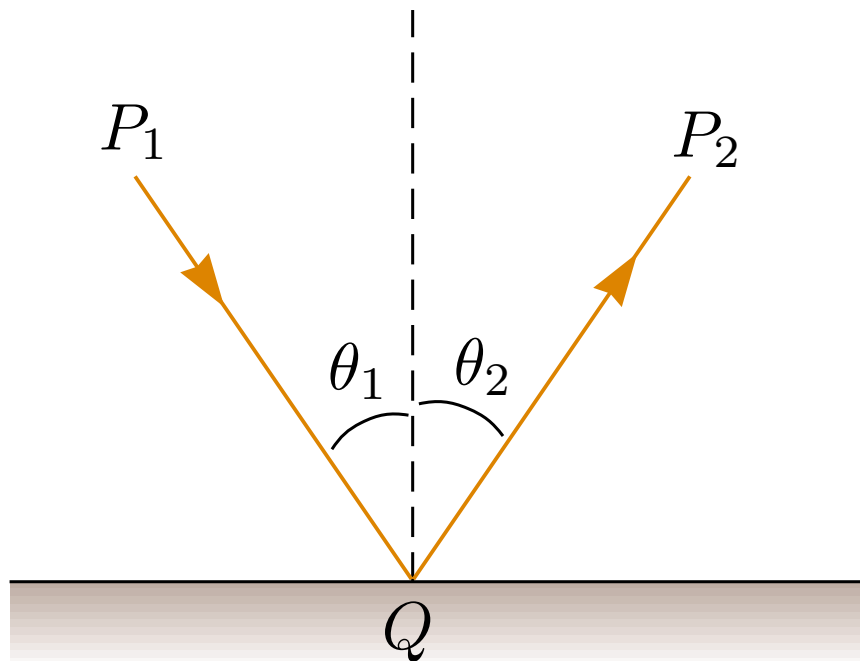


Figure 1: Reflection law. The incident ray, the reflected ray, and the normal all lie in the same plane; $\theta_1 = \theta_2$.

surface, at what apparent distance above the surface does the fish see your face?

8. A converging lens has a focal length of 10.0 cm. (i) An object is placed 30.0 cm from the lens. Construct a ray diagram, find the image distance, and describe the image. (ii) An object is placed 10.0 cm from the lens. Find the image distance and describe the image. (iii) An object is placed 5.00 cm from the lens. Construct a ray diagram, find the image distance, and describe the image.

9. A diverging lens has a focal length of 10.0 cm. (i) An object is placed 30.0 cm from the lens. Construct a ray diagram, find the image distance, and describe the image. (ii) An object is placed 10.0 cm from the lens. Construct a ray diagram, find the image distance, and describe the image. (iii) An object is placed 5.00 cm from the lens. Construct a ray diagram, find the image distance, and describe the image.

10. Two thin converging lenses of focal lengths $f_1 = 10.0$ cm and $f_2 = 20.0$ cm are separated by 20.0 cm. An object is placed 30.0 cm to the left of lens 1. Find the position and the magnification of the final image.

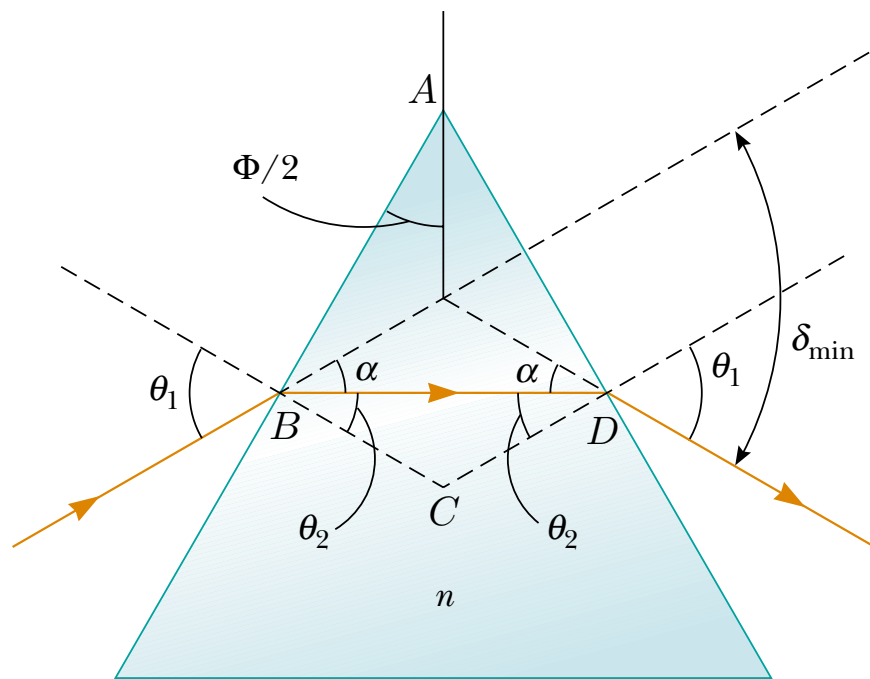


Figure 2: Geometry of a dispersing prism with a light ray passing through the prism at the minimum angle of deviation.

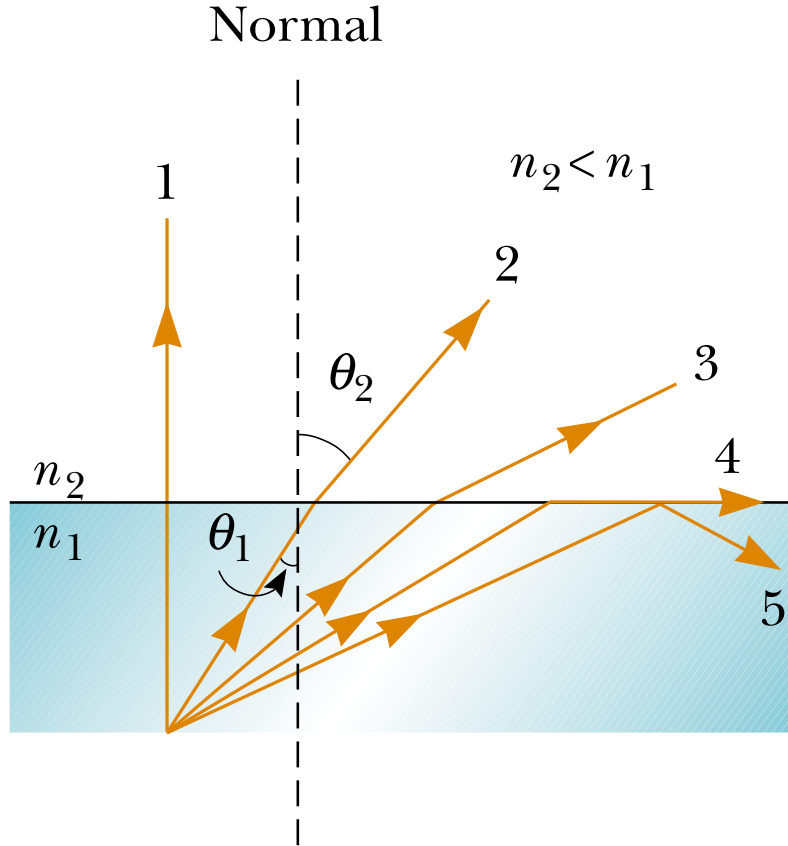


Figure 3: Rays travel from a medium of index of refraction n_1 into a medium of index of refraction n_2 , where $n_2 < n_1$. As the angle of incidence θ_1 increases, the angle of refraction θ_2 increases until $\theta_2 = \pi/2$ (ray 4). For even larger angles of incidence, total internal reflection occurs (ray 5).

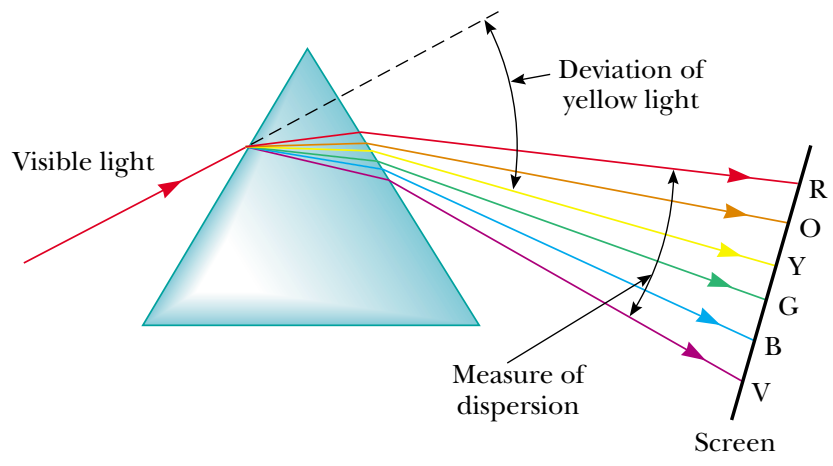


Figure 4: Newton's experiment showing that light is composed of colored components. A narrow beam of light is incident on a prism and produces a broadened and colored band which can be reconstituted back into a narrow white beam of light with a second prism.